

PAASREKENEN

Los deze sommen op.








1.  \times  =





2.  $:$  =

3.  $+$  =

4.  \times  =

5.  $-$  $-$  =

6.  $-$  $-$  =

7.  $+$  $-$  $+$  =

8.  $+$  $+$  $-$  =