



naam: _____

groep: _____

1 Breuken, kommagetallen en procenten.

Schrijf het steeds op 3 manieren op.

a		$\frac{1}{10}$ en 0,1 en 10%
b	 en en
c	 en en
d	 en en
e	 en en
f	 en en

2 Maak de deelsommen.

$576 : 8 =$	$412 : 7 =$	$488 : 12 =$
$832 : 16 =$	$512 : 13 =$	

3 Zet een rondje om het goede antwoord.

- a De Mont Blanc is 4807 m hoog. Dat is ongeveer:
- 50 km
 - 48 km
 - 4,8 km



- b 1 bagel kost € 0,97.
6 bagels kosten:
- ongeveer € 6,50
 - ongeveer € 6,00
 - ongeveer € 7,00



- c In Londen wonen 7,3 miljoen mensen. 7,3 miljoen is:
- 7 300 000
 - 73 000 000
 - 73 000



- d Van de 200 campinggasten zijn 40% Nederlanders. Dat zijn:
- 40 Nederlanders
 - 60 Nederlanders
 - 80 Nederlanders



- e Wandeltochten: maandag 25 km, dinsdag 16 km, woensdag 28 km en donderdag 31 km. Hoeveel kilometer wandelt Jos gemiddeld?
- 26 km per dag
 - 24 km per dag
 - 25 km per dag






naam:

groep:

4 Wat is de prijs van de grastapjten?

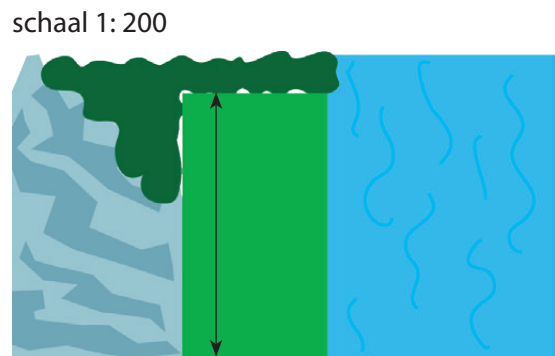
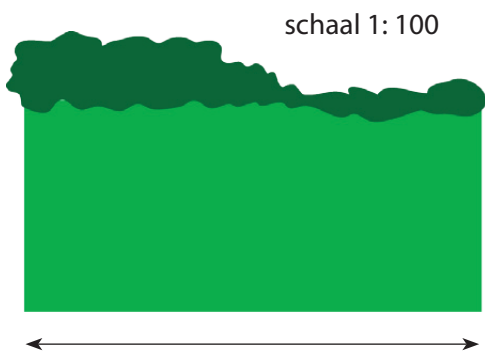
- a $3\text{ m} \times 5\text{ m}$ kost € 3,95
- b $8\text{ m} \times 2\text{ m}$ kost € 6,75
- c $2\text{ m} \times 5\text{ m}$ kost € 5,90
- $3\text{ m} \times 10\text{ m}$ kost €
- $8\text{ m} \times 4\text{ m}$ kost €
- $4\text{ m} \times 10\text{ m}$ kost €



- d $16\text{ m} \times 20\text{ m}$ kost € 30
- e $8\text{ m} \times 4\text{ m}$ kost € 8,90
- $16\text{ m} \times 10\text{ m}$ kost €
- $4\text{ m} \times 4\text{ m}$ kost €

5 Hoe groot is het?

- a De breedte van het kampeerveld is m
- b De lengte van het kampeerveld is m



	in het echt:	schaalmodel:	schaal:
c partytent	7 m	7 cm	1:.....
d speeltent	100 cm	20 cm	1:.....
e koepeltent	3 m	15 cm	1:.....





naam:

groep:

6 Vul de kaartjes in: breuken, kommagetallen en procenten.

a

0,.....	0,.....	0,.....	0,.....	0,.....

.....%%%%%

b

0,.....	0,.....	0,.....	0,.....	0,.....

.....%%%%%

7 Maak de deelsommen.

$945 : 15 =$ <table style="width: 100%; border-collapse: collapse;"> <tr><td style="border-right: 1px solid black; padding: 2px 5px;">9</td><td style="padding: 2px 5px;">4</td><td style="padding: 2px 5px;">5</td><td style="padding: 2px 5px;">-</td><td style="padding: 2px 5px;">x</td></tr> <tr><td style="border-right: 1px solid black; border-top: 1px solid black; height: 15px;"></td><td style="border-top: 1px solid black;"></td><td style="border-top: 1px solid black;"></td><td style="border-top: 1px solid black;"></td><td style="border-top: 1px solid black;"></td></tr> <tr><td style="border-right: 1px solid black; padding: 2px 5px;"></td><td style="padding: 2px 5px;"></td><td style="padding: 2px 5px;"></td><td style="padding: 2px 5px;">-</td><td style="padding: 2px 5px;"></td></tr> <tr><td style="border-right: 1px solid black; border-top: 1px solid black; height: 15px;"></td><td style="border-top: 1px solid black;"></td><td style="border-top: 1px solid black;"></td><td style="border-top: 1px solid black;"></td><td style="border-top: 1px solid black;"></td></tr> </table>	9	4	5	-	x									-							$945 : 18 =$ <table style="width: 100%; border-collapse: collapse;"> <tr><td style="border-right: 1px solid black; padding: 2px 5px;">9</td><td style="padding: 2px 5px;">4</td><td style="padding: 2px 5px;">5</td><td style="padding: 2px 5px;">-</td><td style="padding: 2px 5px;">x</td></tr> <tr><td style="border-right: 1px solid black; border-top: 1px solid black; height: 15px;"></td><td style="border-top: 1px solid black;"></td><td style="border-top: 1px solid black;"></td><td style="border-top: 1px solid black;"></td><td style="border-top: 1px solid black;"></td></tr> <tr><td style="border-right: 1px solid black; padding: 2px 5px;"></td><td style="padding: 2px 5px;"></td><td style="padding: 2px 5px;"></td><td style="padding: 2px 5px;">-</td><td style="padding: 2px 5px;"></td></tr> <tr><td style="border-right: 1px solid black; border-top: 1px solid black; height: 15px;"></td><td style="border-top: 1px solid black;"></td><td style="border-top: 1px solid black;"></td><td style="border-top: 1px solid black;"></td><td style="border-top: 1px solid black;"></td></tr> </table>	9	4	5	-	x									-							$781 : 13 =$ <table style="width: 100%; border-collapse: collapse;"> <tr><td style="border-right: 1px solid black; padding: 2px 5px;">7</td><td style="padding: 2px 5px;">8</td><td style="padding: 2px 5px;">1</td><td style="padding: 2px 5px;">-</td><td style="padding: 2px 5px;">x</td></tr> <tr><td style="border-right: 1px solid black; border-top: 1px solid black; height: 15px;"></td><td style="border-top: 1px solid black;"></td><td style="border-top: 1px solid black;"></td><td style="border-top: 1px solid black;"></td><td style="border-top: 1px solid black;"></td></tr> <tr><td style="border-right: 1px solid black; padding: 2px 5px;"></td><td style="padding: 2px 5px;"></td><td style="padding: 2px 5px;"></td><td style="padding: 2px 5px;">-</td><td style="padding: 2px 5px;"></td></tr> <tr><td style="border-right: 1px solid black; border-top: 1px solid black; height: 15px;"></td><td style="border-top: 1px solid black;"></td><td style="border-top: 1px solid black;"></td><td style="border-top: 1px solid black;"></td><td style="border-top: 1px solid black;"></td></tr> </table>	7	8	1	-	x									-						
9	4	5	-	x																																																										
			-																																																											
9	4	5	-	x																																																										
			-																																																											
7	8	1	-	x																																																										
			-																																																											
$2368 : 40 =$ <table style="width: 100%; border-collapse: collapse;"> <tr><td style="border-right: 1px solid black; padding: 2px 5px;">2</td><td style="padding: 2px 5px;">3</td><td style="padding: 2px 5px;">6</td><td style="padding: 2px 5px;">8</td><td style="padding: 2px 5px;">-</td><td style="padding: 2px 5px;">x</td></tr> <tr><td style="border-right: 1px solid black; border-top: 1px solid black; height: 15px;"></td><td style="border-top: 1px solid black;"></td><td style="border-top: 1px solid black;"></td><td style="border-top: 1px solid black;"></td><td style="border-top: 1px solid black;"></td><td style="border-top: 1px solid black;"></td></tr> <tr><td style="border-right: 1px solid black; padding: 2px 5px;"></td><td style="padding: 2px 5px;"></td><td style="padding: 2px 5px;"></td><td style="padding: 2px 5px;"></td><td style="padding: 2px 5px;">-</td><td style="padding: 2px 5px;"></td></tr> <tr><td style="border-right: 1px solid black; border-top: 1px solid black; height: 15px;"></td><td style="border-top: 1px solid black;"></td><td style="border-top: 1px solid black;"></td><td style="border-top: 1px solid black;"></td><td style="border-top: 1px solid black;"></td><td style="border-top: 1px solid black;"></td></tr> </table>	2	3	6	8	-	x											-								$3635 : 25 =$ <table style="width: 100%; border-collapse: collapse;"> <tr><td style="border-right: 1px solid black; padding: 2px 5px;">3</td><td style="padding: 2px 5px;">6</td><td style="padding: 2px 5px;">3</td><td style="padding: 2px 5px;">5</td><td style="padding: 2px 5px;">-</td><td style="padding: 2px 5px;">x</td></tr> <tr><td style="border-right: 1px solid black; border-top: 1px solid black; height: 15px;"></td><td style="border-top: 1px solid black;"></td><td style="border-top: 1px solid black;"></td><td style="border-top: 1px solid black;"></td><td style="border-top: 1px solid black;"></td><td style="border-top: 1px solid black;"></td></tr> <tr><td style="border-right: 1px solid black; padding: 2px 5px;"></td><td style="padding: 2px 5px;"></td><td style="padding: 2px 5px;"></td><td style="padding: 2px 5px;"></td><td style="padding: 2px 5px;">-</td><td style="padding: 2px 5px;"></td></tr> <tr><td style="border-right: 1px solid black; border-top: 1px solid black; height: 15px;"></td><td style="border-top: 1px solid black;"></td><td style="border-top: 1px solid black;"></td><td style="border-top: 1px solid black;"></td><td style="border-top: 1px solid black;"></td><td style="border-top: 1px solid black;"></td></tr> </table>	3	6	3	5	-	x											-																				
2	3	6	8	-	x																																																									
				-																																																										
3	6	3	5	-	x																																																									
				-																																																										

8 Zet een rondje om het goede antwoord.

- | | |
|---|--|
| <p>a De omtrek van het rechthoekige speelterreintje is 24 m. Wat kan de oppervlakte zijn?</p> <p>• 350 m² • 35 m² • 24 m²</p> | <p>b Snorkelset € 29,90. Vandaag 10% korting. De snorkelset kost vandaag ongeveer:</p> <p>• € 27,- • € 29,- • € 19,-</p> |
| <p>c De opbrengst voor 'World Child' is € 1.487.390,-. Rond het af op een honderdduizendtal.</p> <p>• 1 400 000 • 1 500 000 • 1 490 000</p> | <p>d 4 van de 5 campinggasten maken gebruik van aansluiting elektriciteit. Hoeveel procent is dat?</p> <p>• 40% • 50% • 80%</p> |
| <p>e De rivier Le Loue steeg na veel regen van 0,85 m naar 3,01 m. Het verschil is:</p> <p>• 3,84 m • 2,16 m • 2,86 m</p> | |